

Add and Subtract Money

1. I buy two apples. Each apple costs 20p.

How much should I pay in total?

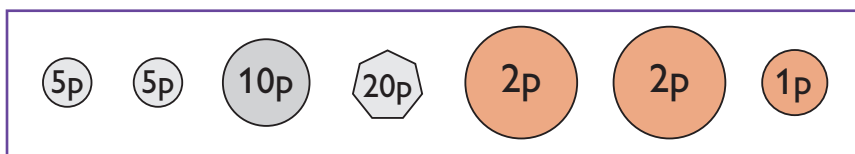
I give the shopkeeper a 50p coin.

How much change will they give me back?

2. Jackson goes to a museum.

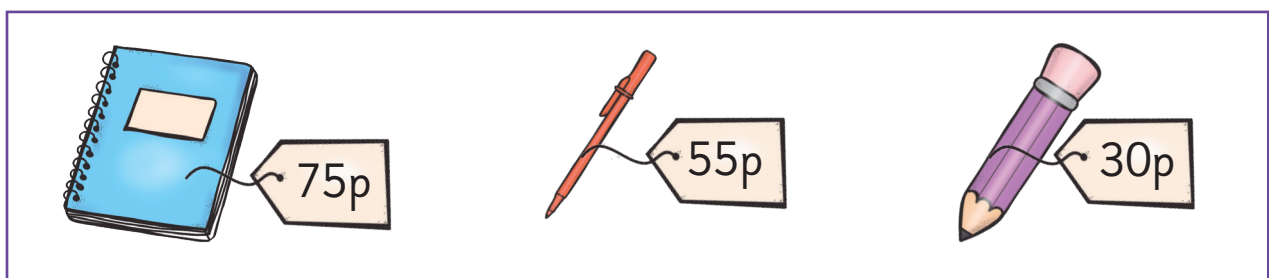
He wants to buy something from the gift shop.

This is the money that he has in his wallet:



How much money does Jackson have?

Here are the gifts in the shop:

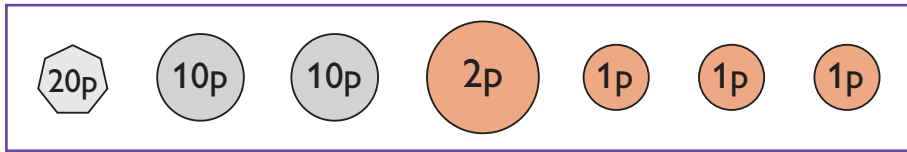


Which gift can he afford to buy?

How much money will he have left?

Add and Subtract Money

3. Look at the coins below.



I pay for an item costing 22p using the 20p coin and a 2p coin. Write down a different group of coins that you could use to pay for the same thing.

.....


4. In my purse, I have six 10p coins and three 2p coins. How much money do I have altogether?

.....

My friend has a £5 note and a £2 coin in their pocket. How much money do they have altogether?

.....

5. There is an ice cream van in the park. Here is what they sell:



Ice cream cone - 60p
Ice lolly - 30p
Ice cream tub - 55p
Fruit drink - 35p

How much does one ice cream cone and one lolly cost?p

How much is a fruit drink and an ice cream tub?p

I buy an ice cream tub. I hand the ice cream person a 50p coin and a 10p coin. How much change will I get?p

Add and Subtract Money

Answers

1. I buy two apples. Each apple costs 20p.

How much should I pay in total?40p

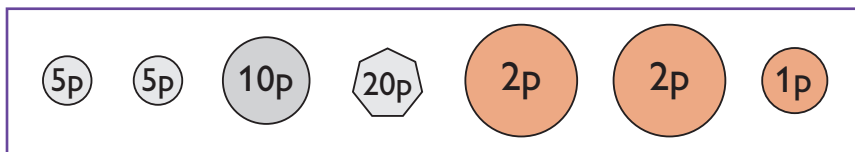
I give the shopkeeper a 50p coin.

How much change will they give me back?10p

2. Jackson goes to a museum.

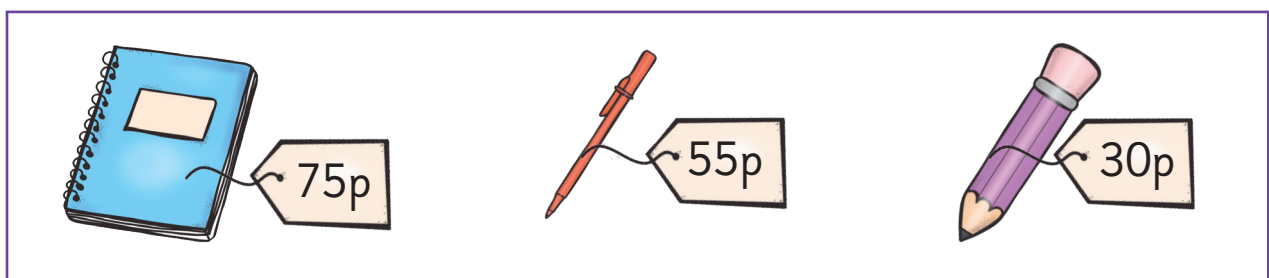
He wants to buy something from the gift shop.

This is the money that he has in his wallet:



How much money does Jackson have?45p

Here are the gifts in the shop:



Which gift can he afford to buy?

The pencil.....

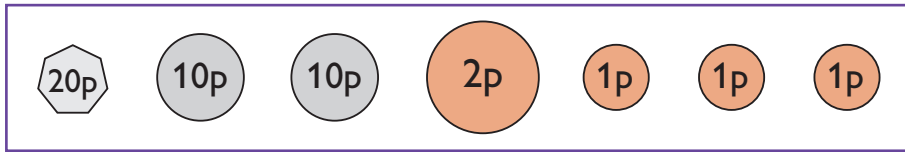
How much money will he have left?

.....15p

Add and Subtract Money

Answers

3. Look at the coins below.



I pay for an item costing 22p using the 20p coin and a 2p coin. Write down a different group of coins that you could use to pay for the same thing.

..... Any of these:

10p, 10p and 2p / 10p, 10p,
1p and 1p / 20p, 1p and 1p


4. In my purse, I have six 10p coins and three 2p coins. How much money do I have altogether?

..... 66p

My friend has a £5 note and a £2 coin in their pocket. How much money do they have altogether?

..... £7

5. There is an ice cream van in the park. Here is what they sell:



Ice cream cone - 60p
Ice lolly - 30p
Ice cream tub - 55p
Fruit drink - 35p

How much does one ice cream cone and one lolly cost? 90p

How much is a fruit drink and an ice cream tub? 90p

I buy an ice cream tub. I hand the ice cream person a 50p coin and a 10p coin. How much change will I get? 5p