

# Ordering Numbers

## Task 1

Can you put these 2-digit numbers in order?  
Make sure you read the question carefully.

**Top Tip:**  
Cross out the numbers  
as you use them.

1. Put these numbers in order from the smallest to largest.

52      81      74      99      16      61

Smallest Largest →

|  |  |  |  |  |  |
|--|--|--|--|--|--|
|  |  |  |  |  |  |
|--|--|--|--|--|--|

2. What about these numbers — can you order them  
from largest to smallest?




36      25      91      41      31      72

Largest Smallest →

|  |  |  |  |  |  |
|--|--|--|--|--|--|
|  |  |  |  |  |  |
|--|--|--|--|--|--|

3. Order these numbers from smallest to largest. **Watch out!**  
This one has 1-digit and 2-digit numbers!



55      29      7      83      9      27

Smallest Largest →

|  |  |  |  |  |  |
|--|--|--|--|--|--|
|  |  |  |  |  |  |
|--|--|--|--|--|--|

# Ordering Numbers

## Task 2

1. During Sports Day, Year 2 had a long jump competition. Can you put the children's names in order from who did the biggest jump to who did the smallest jump?



**Amber** 64 cm



**Daya** 92 cm



**Ekam** 91 cm



**Amy** 72 cm

Biggest

Smallest

2. Class 2C measured the rainfall over 5 days. Here are the results of their experiment. Can you put the days in order from the day with the least rain to the day with the most rain?



**Monday** 16 ml



**Tuesday** 55 ml



**Wednesday** 99 ml



**Thursday** 7 ml



**Friday** 54 ml


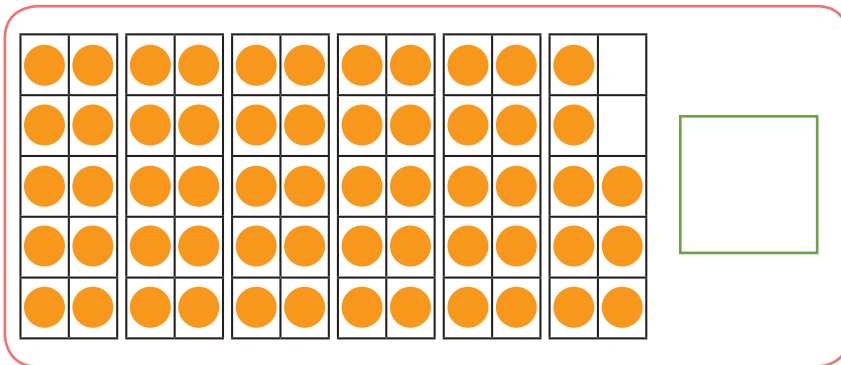
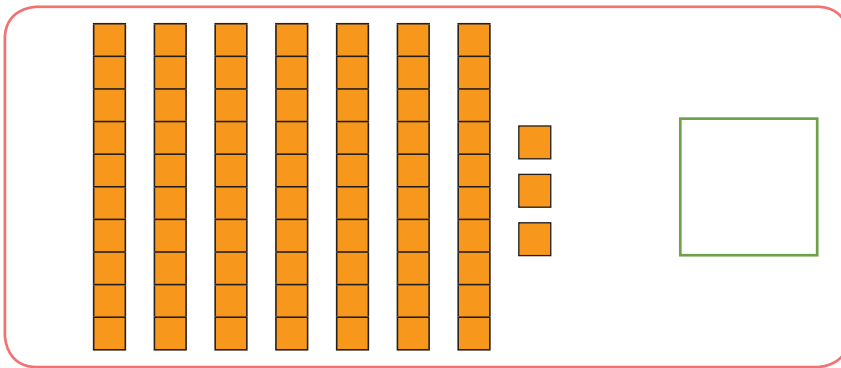
Least

Most

# Ordering Numbers

## Task 3

Each picture below represents a 2-digit number. Write the number in the box next to the picture. Then write these numbers in order from smallest to largest.


$$34 + 51$$

Smallest

Largest ↓

# Ordering Numbers

## Answers

### Task 1

Can you put these 2-digit numbers in order?  
Make sure you read the question carefully.

**Top Tip:**  
Cross out the numbers  
as you use them.

1. Put these numbers in order from the smallest to largest.

52      81      74      99      16      61

Smallest  Largest

16      52      61      74      81      99

2. What about these numbers — can you order them  
from largest to smallest?




36      25      91      41      31      72

Largest  Smallest

91      72      41      36      31      25

3. Order these numbers from smallest to largest. **Watch out!**  
This one has 1-digit and 2-digit numbers!



55      29      7      83      9      27

Smallest  Largest

7      9      27      29      55      83

# Ordering Numbers

## Answers

### Task 2

1. During Sports Day, Year 2 had a long jump competition. Can you put the children's names in order from who did the biggest jump to who did the smallest jump?



**Amber** 64 cm



**Daya** 92 cm



**Ekam** 91 cm



**Amy** 72 cm

Biggest

Daya

Ekam

Amy

Amber

Smallest

2. Class 2C measured the rainfall over 5 days. Here are the results of their experiment. Can you put the days in order from the day with the least rain to the day with the most rain?



**Monday** 16 ml



**Tuesday** 55 ml



**Wednesday** 99 ml



**Thursday** 7 ml



**Friday** 54 ml

Least

Thursday

Monday

Friday

Tuesday

Wednesday

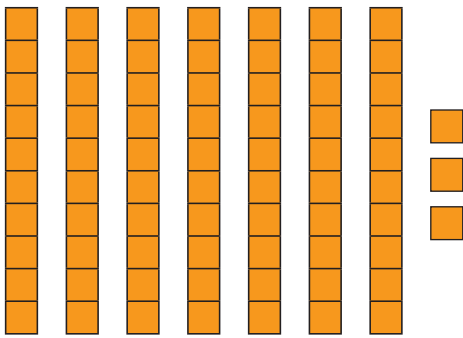
Most

# Ordering Numbers

## Answers

### Task 3


Each picture below represents a 2-digit number. Write the number in the box next to the picture. Then write these numbers in order from smallest to largest.



73



24



58



$$34 + 51$$

85

Smallest

24

58

73

85

Largest