


Comparing Time Problems

1) Complete the sentences:



There are minutes in 1 hour.

There are hours in 1 day.

2) Circle the **longest** time in each row.

7 hours

3 minutes

49 minutes

1 minute


10 hours

1 day

3 days

22 hours

25 minutes



3) Circle the **shortest** time in each row.

17 hours

4 minutes

59 minutes

12 minutes


1 hour

10 days

5 days

2 hours

5 minutes



4) Write the amounts of time below in order from the shortest time to the longest time.

7 days

2 minutes

4 hours


shortest

longest

Comparing Time Problems

Answers

1) Complete the sentences:



There are ...60... minutes in 1 hour.

There are ...24... hours in 1 day.

2) Circle the **longest** time in each row.

7 hours

3 minutes

49 minutes

1 minute


10 hours

1 day

3 days

22 hours

25 minutes



3) Circle the **shortest** time in each row.

17 hours

4 minutes

59 minutes

12 minutes


1 hour

10 days

5 days

2 hours

5 minutes



4) Write the amounts of time below in order from the shortest time to the longest time.

7 days

2 minutes

4 hours

2 minutes

4 hours

7 days

shortest

longest