


# Telling the Time to 5 Minutes

Can you help Layla the Llama tell the time?  
Circle the correct time shown on each clock.




half past 3

10 minutes past 3




20 minutes to 1

5 minutes past 8



5 minutes to 6

6 o'clock



25 minutes past 9

25 minutes past 10


# Telling the Time to 5 Minutes



20 minutes past 4

half past 12


5 minutes past 4



10 minutes to 3

half past 10


10 minutes past 3



25 minutes to 1

25 minutes to 7


10 minutes to 1



20 minutes to 11

20 minutes past 9


4 o'clock



# Telling the Time to 5 Minutes


## Answers

Can you help Layla the Llama tell the time?  
Circle the correct time shown on each clock.




half past 3

10 minutes past 3




20 minutes to 1

5 minutes past 8



5 minutes to 6

6 o'clock



25 minutes past 9

25 minutes past 10

# Telling the Time to 5 Minutes


## Answers



20 minutes past 4

half past 12


5 minutes past 4



10 minutes to 3

half past 10

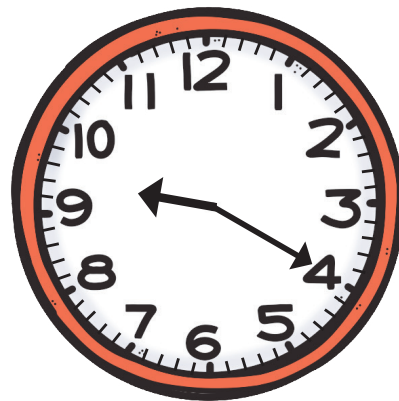
10 minutes past 3



25 minutes to 1

25 minutes to 7

10 minutes to 1



20 minutes to 11

20 minutes past 9

4 o'clock

